

Assignment R

Sec. ___

This review assignment is due the first day of class. If this assignment seems difficult, then consider refreshing your algebra and triangle trigonometry skills with either MATH 137 or the short online refresher courses Algebra Prep for Math 12 and Trig Prep for Math 12 at

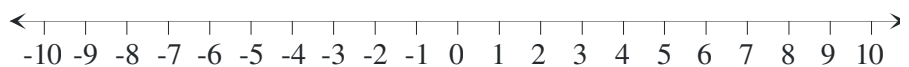
<https://sites.google.com/site/mathchaircamosun/home/ALEKS-prep-courses>

No calculators. Show all of your work in the space provided.

1. Simplify: $\frac{x^4 - 16}{x^2 - 10x + 16}$

2. Combine: $\frac{1}{(x-1)^2} - \frac{1}{2(x-1)}$

3. Solve and graph your solution on the number line: $3x - (x - 7) > 4\left(x - \frac{20}{10}\right)$

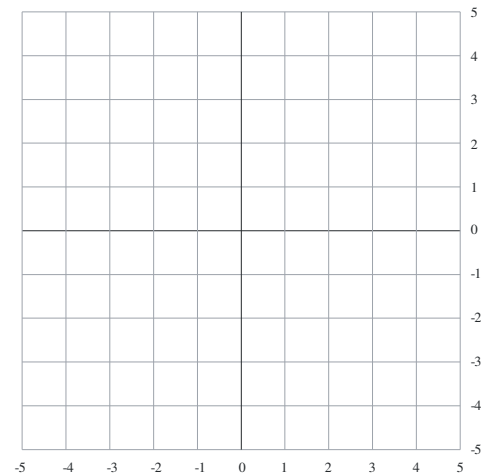


4. Solve $S = 2\pi r^2 + 2\pi rh$ for h .

5. Solve the following system of equations algebraically. Then graph the two equations and show the solution for the system on your graph.

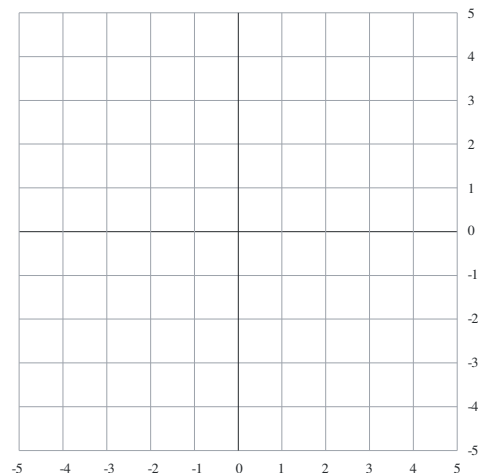
$$3x + 2y = -3$$

$$-5x + 4y = 16$$



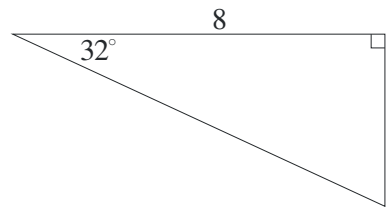
6. Solve $\sqrt{4x^2 - 16x} = 3$ and check your solutions.

7. Given $f(x) = -2(x-3)^2 + 4$, find the vertex and the exact x -intercepts and graph the function.



8. Simplify: $\frac{(9a^3)^{\frac{5}{2}}}{27a^{-\frac{1}{3}}}$

9. Solve the right triangle shown below; that is, find all missing sides and angles. (You will need a calculator for this question.)



10. Solve $\sin \theta = \frac{\sqrt{3}}{2}$, $0^\circ \leq \theta < 360^\circ$ (Hint: There are two solutions.)
